

# How do Location, Climate, and Natural Resources Affect People in Canada?

Look at Figure 1 to the right. Each dot represents a group of people.

1. Based on the figure, where do most people live in Canada?

---

---

---

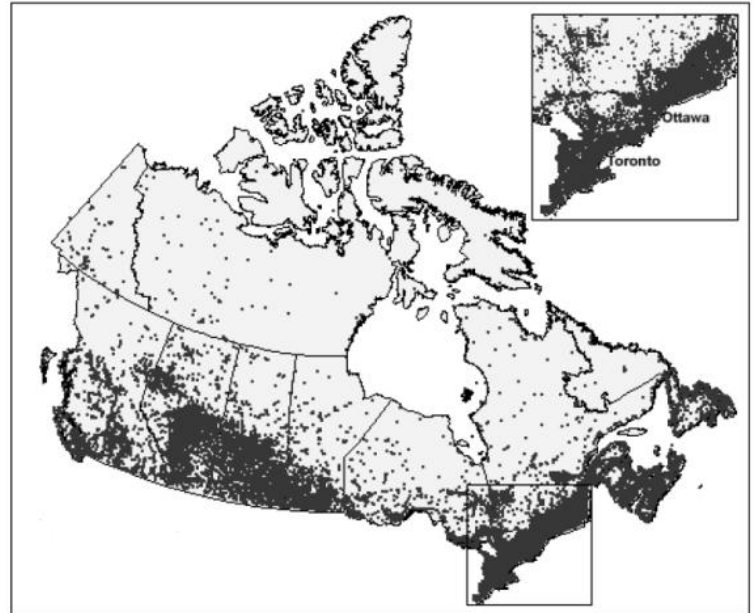


Figure 1

Look at Figure 2 to the right.

2. Based on Figure 2, why do you think Canadians live where indicated in Figure 1?

---

---

---

---

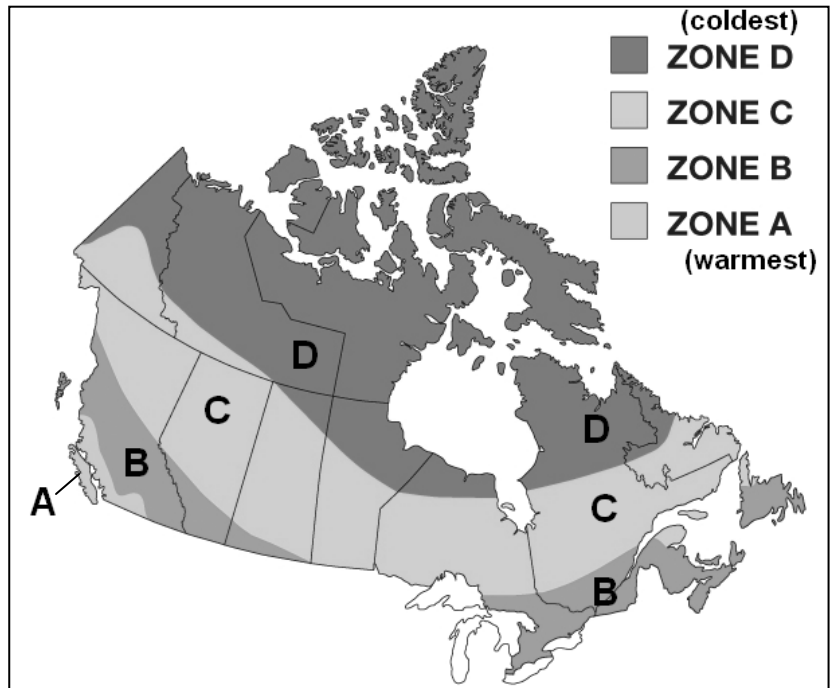


Figure 2

# How do Location, Climate, and Natural Resources Affect People in Canada?

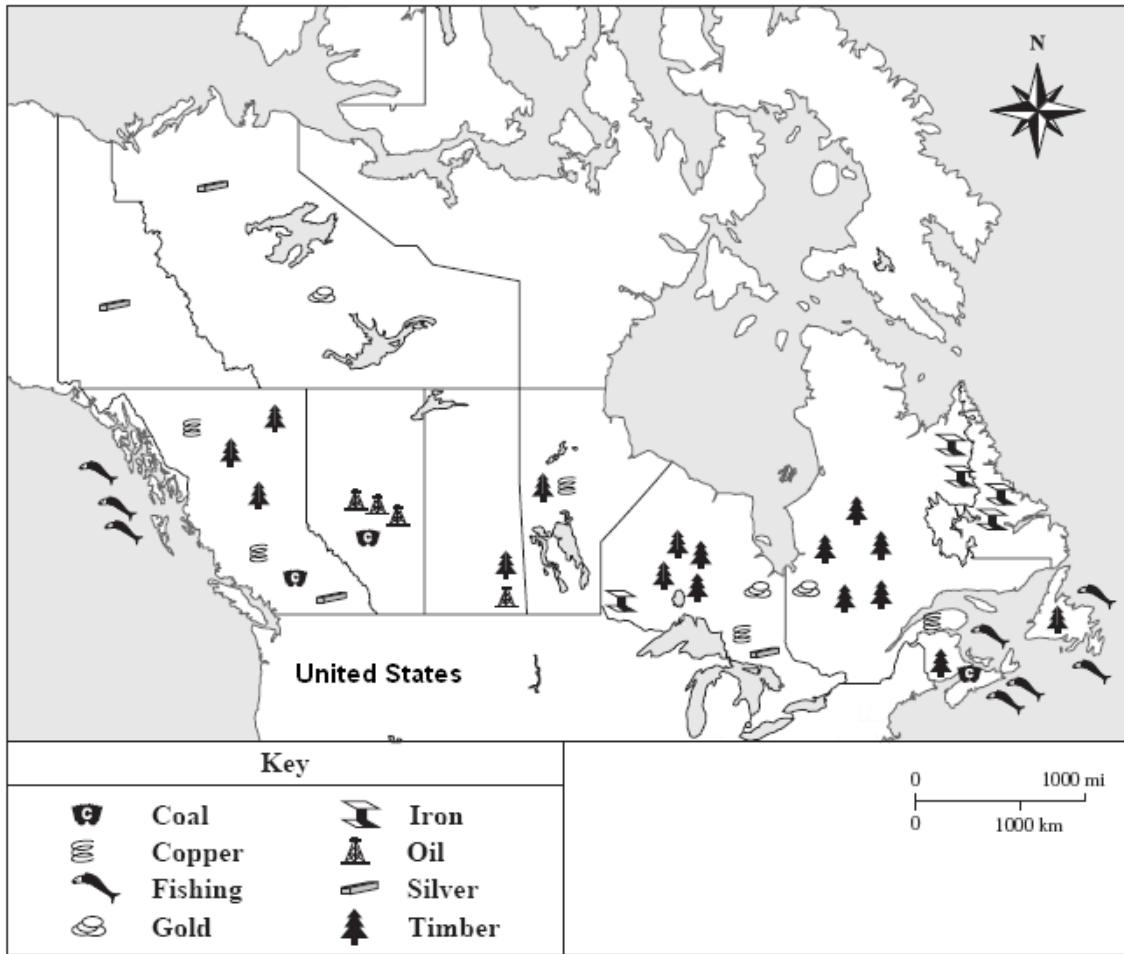


Figure 3

DK World Atlas, 3rd ed. (Dorling Kindersley: 2004)

3. Based on Figure 3 above, how might you describe Canada's availability of natural resources? \_\_\_\_\_

\_\_\_\_\_

4. Does the presence of natural resources affect where people live in Canada? Explain. \_\_\_\_\_

\_\_\_\_\_

\_\_\_\_\_

5. Based on Canada's location, predict one of Canada's major trading partners. \_\_\_\_\_

6. Using Figure 3 above, identify Canada's method for transporting goods to other countries. Explain your answer.

\_\_\_\_\_

\_\_\_\_\_

7. Imagine that you are a Canadian citizen. Using Figure 1, Figure 2 and Figure 3, describe a location where you might live and identify an occupation you might have based on that location. \_\_\_\_\_

\_\_\_\_\_

\_\_\_\_\_