

Quizizz

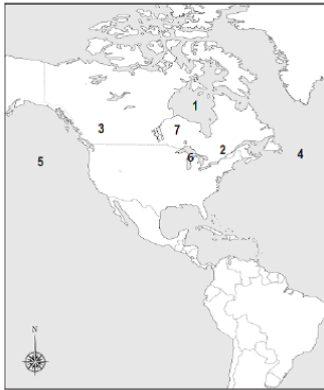
Canada Geography

Name : _____

Class : _____

Date : _____

1. 1. Which is marked with a "1" on the map?



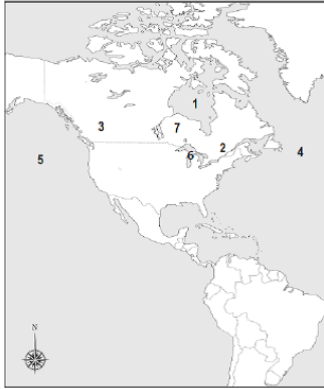
- | | | | | | |
|--------------------------|----|---------------|--------------------------|----|----------------|
| <input type="checkbox"/> | a) | Hudson Bay | <input type="checkbox"/> | b) | Pacific Ocean |
| <input type="checkbox"/> | c) | Lake Superior | <input type="checkbox"/> | d) | Atlantic Ocean |

2. 2. Which would be found near the "3" on the map?



- | | | | | | |
|--------------------------|----|-----------------|--------------------------|----|--------------------|
| <input type="checkbox"/> | a) | Lake Huron | <input type="checkbox"/> | b) | Canadian Shield |
| <input type="checkbox"/> | c) | Rocky Mountains | <input type="checkbox"/> | d) | St. Lawrence River |

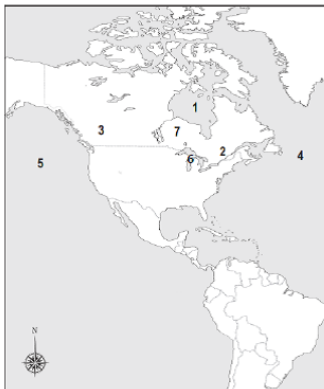
3. Which number is closest to the St. Lawrence River?



- a) 2
- c) 6

- b) 3
- d) 7

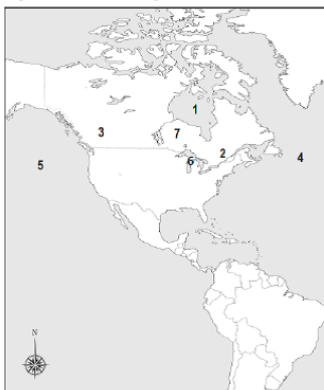
4. Which would be found near the “7” on the map?



- a) Lake Huron
- c) Rocky Mountains

- b) Canadian Shield
- d) St. Lawrence River

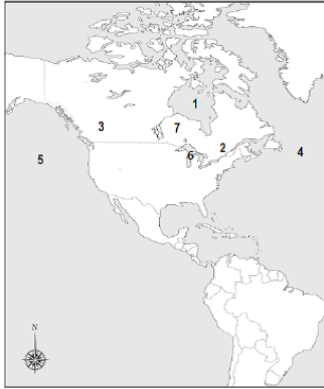
5. Which feature does the “5” on the map represent?



- a) Hudson Bay
- c) Pacific Ocean

- b) Great Lakes
- d) Atlantic Ocean

6. Which number represents the Great Lakes?



a) 7

b) 2

c) 6

d) 1

7. Which area is known for its rolling, rocky land and covers eastern and central Canada?

a) Lake Huron

b) Canadian Shield

c) Rocky Mountains

d) St. Lawrence River

8. Which borders Canada?

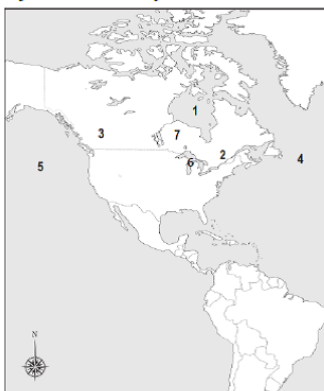
a) Mexico

b) United States

c) Panama

d) Russia

9. Which feature does the "4" on the map represent?



a) Hudson Bay

b) Pacific Ocean

c) Atlantic Ocean

d) St. Lawrence River

10. What is the Capital of Canada

a) Toronto

b) Ottawa

c) Vancouver

d) Montreal